

# POIMENUJ GEOMETRIJSKE LIKE NA SLIKI.



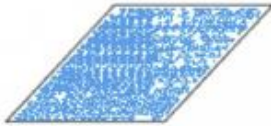
pravokotnik




kvadrat



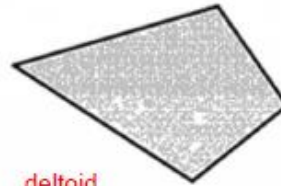
paralelogram



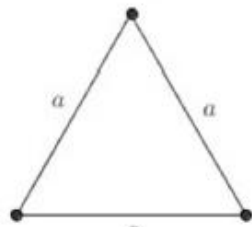
romb



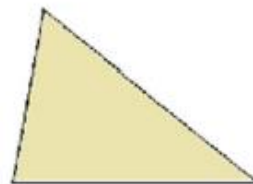
trapez



deltoid




enakostraničen trikotnik



trikotnik

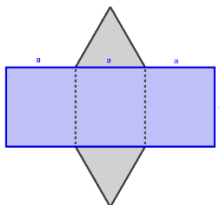


enakokrak trikotnik

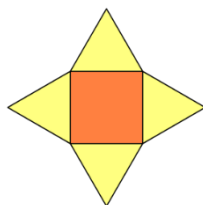


pravokotni trikotnik

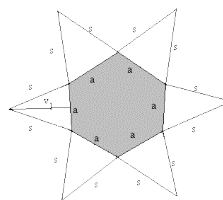
MREŽE sestavljajo naslednji liki:



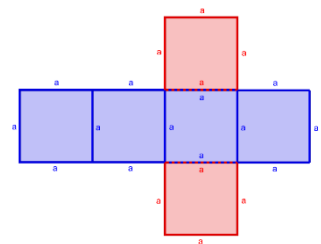
Pravokotniki in enakostr. trikotnika



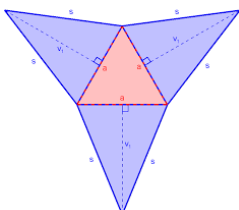
kvadrat in enakostr. trikotniki



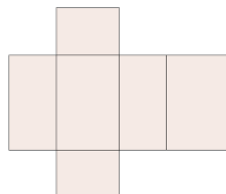
šestkotnik in enakokraki trikotniki



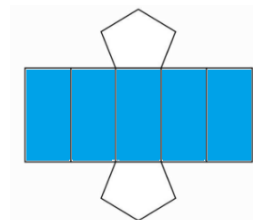
kvadrati



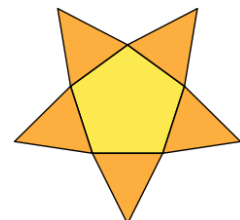
Enakostr. trikotnik in Enakokraki trikotniki



pravokotniki



petkotnik in pravokotniki



petkotnik in enakostran. trikotniki